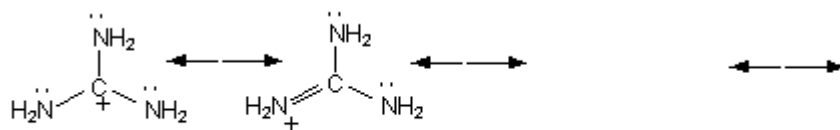
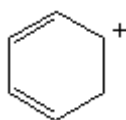


## Quiz 4

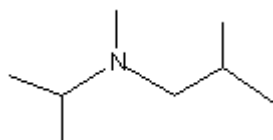
1. Draw two more resonance contributors. Label the major and minor resonance contributors.



2. Draw as many resonance contributors as you can for:



3. Write the condensed formula for:



4. Write the line angle formula for:

